

Name \_\_\_\_\_

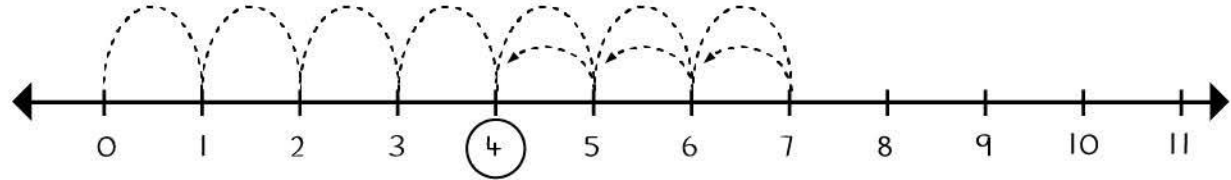
Date \_\_\_\_\_



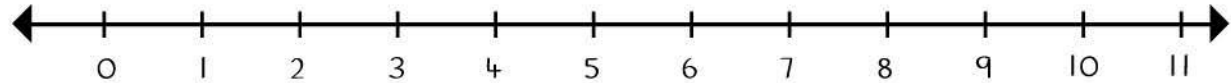
What number is Frog's final leap? Circle the number.

Example

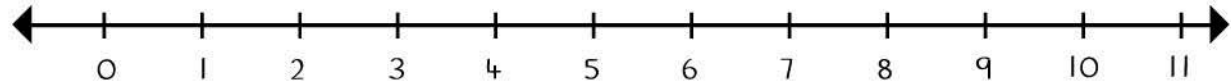
Frog leaps 7 spaces forward and 3 spaces backwards



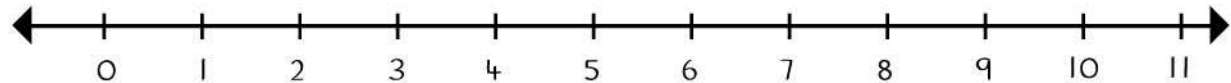
Frog leaps 5 spaces forward and 1 space backwards



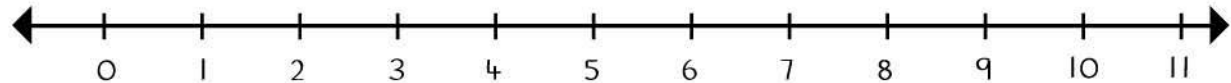
Frog leaps 9 spaces forward and 6 spaces backwards



Frog leaps 8 spaces forward and 2 spaces backwards



Frog leaps 10 spaces forward and 7 spaces backwards



Frog leaps 9 spaces forward and 7 spaces backwards

